



6	M	E	1
---	---	---	---



↑
請把電腦條碼貼在方格內
Please stick the barcode label in the box

Education Bureau
Territory-wide System Assessment 2013
Primary 6
Mathematics

Instructions:

1. Stick barcode labels on pages 1, 3, 5, 7 and 9 in the spaces provided.
2. There are 39 questions in this test. Answer all questions.
3. Time allowed is 50 minutes.
4. Write your answers in this Question-Answer Booklet.
5. Do not write in the margins.
6. Use of calculators is not allowed.
7. Do your rough work on the rough work sheet provided.
8. Write your School Code, Class and Class Number in the boxes below.

Instructions for answering questions:

- (a) Multiple choice questions – Blacken the circle next to the correct answer with an **HB pencil**.
For example:
- A
 - B
 - C
 - D
- (b) Questions in which you are asked to “Show your working” – Write your mathematical expressions, answers and statements/conclusions in the spaces provided. There is **NO** need to show your rough work.
- (c) Other types of questions – Answer as required in the spaces provided.

School Code
學校編號

--	--	--

Class
班別

6	
---	--

Class No.
班號

--	--

↑
Write one **capital letter** in this box
此格只許填寫一個大楷英文字母

1. Which of the following numbers has the digit '0' in its thousands place?

- A. 12 340
- B. 12 304
- C. 12 034
- D. 10 234

2. Which of the following numbers is a multiple of 15?

- A. 5
- B. 10
- C. 35
- D. 60

3. List all the factors of 44.

Answer: _____


4. The Highest Common Factor (H.C.F.) of 18 and 48

is _____ .

5. Fill in the box with the correct number.

$$\frac{\square}{7} = 1$$

請把電腦條碼貼在方格內
Please stick the barcode label in the box



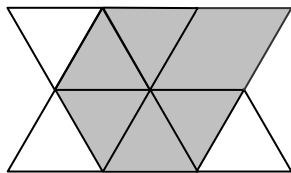
Please do not write in the margin.

6. The first common multiple of 6 and 10 is 30.

Which of the following numbers is their third common multiple?

- A. 45
- B. 60
- C. 75
- D. 90

7. What fraction of the whole figure is shaded?



Answer:



of the whole figure is shaded.

Please do not write in the margin.



Please do not write in the margin.

8. (a) Change $2\frac{3}{8}$ into an improper fraction.

Answer:

- (b) Change $\frac{63}{5}$ into a mixed number.

Answer:

9. Which of the following fractions is the smallest?

$$\frac{4}{11}, \frac{8}{11}, \frac{4}{15}$$


Answer:

10. Change $\frac{5}{18}$ into a decimal correct to two decimal places.

Answer:

Please do not write in the margin.

請把電腦條碼貼在方格內
Please stick the barcode label in the box



Please do not write in the margin.

11. In the number 1.396, which digit stands for the smallest value?

- A. '9'
- B. '6'
- C. '3'
- D. '1'

12. $10 \div 9 \times 90 =$ _____

13. $3\frac{1}{6} - \frac{2}{9} =$

14. $\frac{2}{5} \div 4 \times 1\frac{1}{9} =$

15. $36.4 + 3.6 - 8.45 =$ _____

16. $1.1 \times 5 \times 3.4 =$ _____


Please do not write in the margin.

Please do not write in the margin.

17. Yesterday, Mr Cheung spent $8\frac{1}{2}$ hours working, $\frac{3}{4}$ hour reading and $1\frac{1}{4}$ hours doing sport.

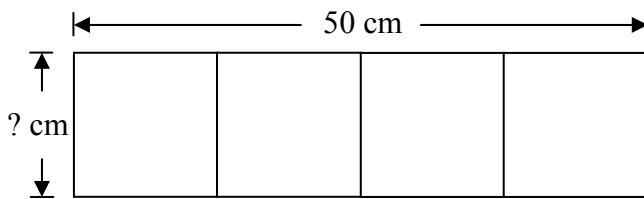
How many hours did he spend on these three activities altogether?

(Show your working)



Please do not write in the margin.


18.



The rectangle above is made up of 4 square cards.

- (a) The side of a square is _____ cm.
- (b) The perimeter of the rectangle is _____ cm.

請把電腦條碼貼在方格內
Please stick the barcode label in the box



Please do not write in the margin.

19. A teacher bought 200 chocolates. Each chocolate weighs 2.5 g. She divides the chocolates equally into 10 packets. What is the weight of each packet?
(Show your working)

20. (a) Change 160% into a decimal.

Answer: _____

- (b) Change 3.2 into a percentage.

Answer: _____ %


21. A department store has 200 employees and 60% of them are female.

(a) _____ % of the employees are male.

(b) There are _____ female employees in the department store.

Please do not write in the margin.

22.



(a) The clock in the hall showed the time when the guest started his speech. The time was _____ minutes

* past/ to _____ in the afternoon.

(*Circle the answer)

(b) The guest finished his speech after 40 minutes. In 24-hour time, the time was _____ : _____ .

23. Fill in the following blanks with suitable units.


(a) The capacity of a soft drink bottle is about 500 _____ .



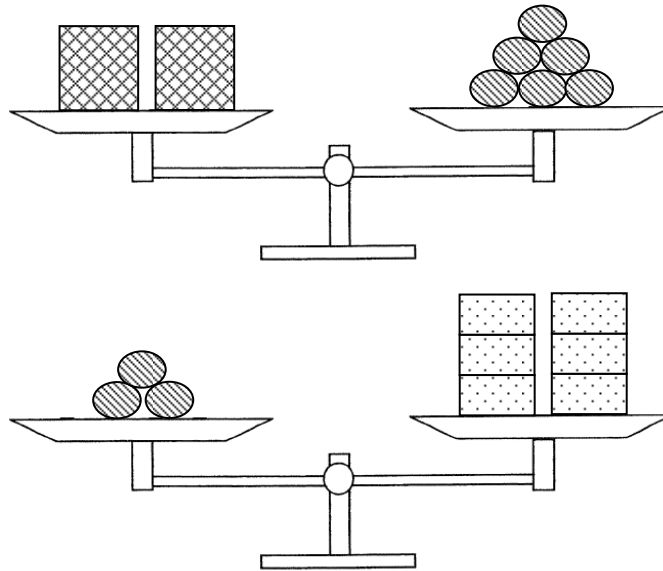
(b) A drinking straw is about 25 _____ long.

(c) A bottle of soft drink weighs about 600 _____ .









請把電腦條碼貼在方格內
Please stick the barcode label in the box



24.



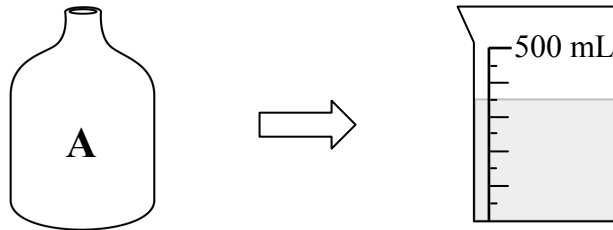
Study the diagrams above. Which of the following is correct?

- A.  and  weigh the same.
- B.  is heavier than .
- C.  is lighter than .
- D. The weights of  and  cannot be compared.

Please do not write in the margin.

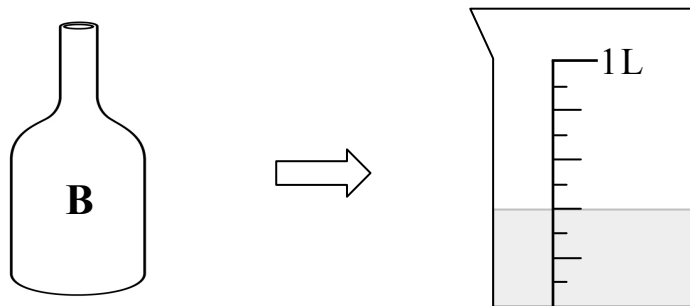
Please do not write in the margin.

25. (a) Fill up Bottle A with water. Then pour all the water into a beaker.



The capacity of Bottle A is _____ mL.

- (b) Fill up Bottle B with water. Then pour all the water into a beaker.



The capacity of Bottle B is _____ L.

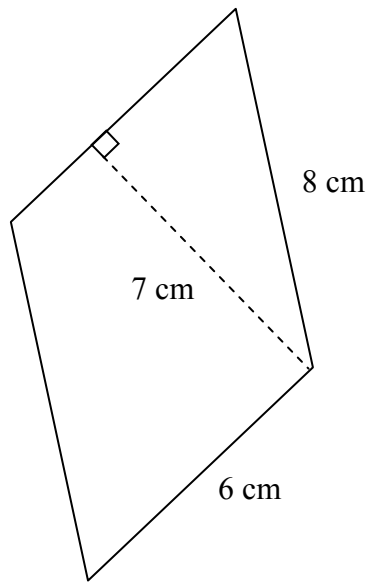
- (c) The capacity of Bottle A is

* larger than / equal to / smaller than
the capacity of Bottle B. (* Circle the answer)

26. A plastic tape is 440 cm long. How many plastic rings of diameter 7 cm can be made? (Take π as $\frac{22}{7}$)

Answer: _____ plastic rings can be made.

27.

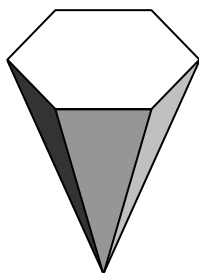


The figure above is a parallelogram.

Its area is _____ cm^2 .

28. The average cycling speed of Polly is about 15 _____. (Write a suitable unit)

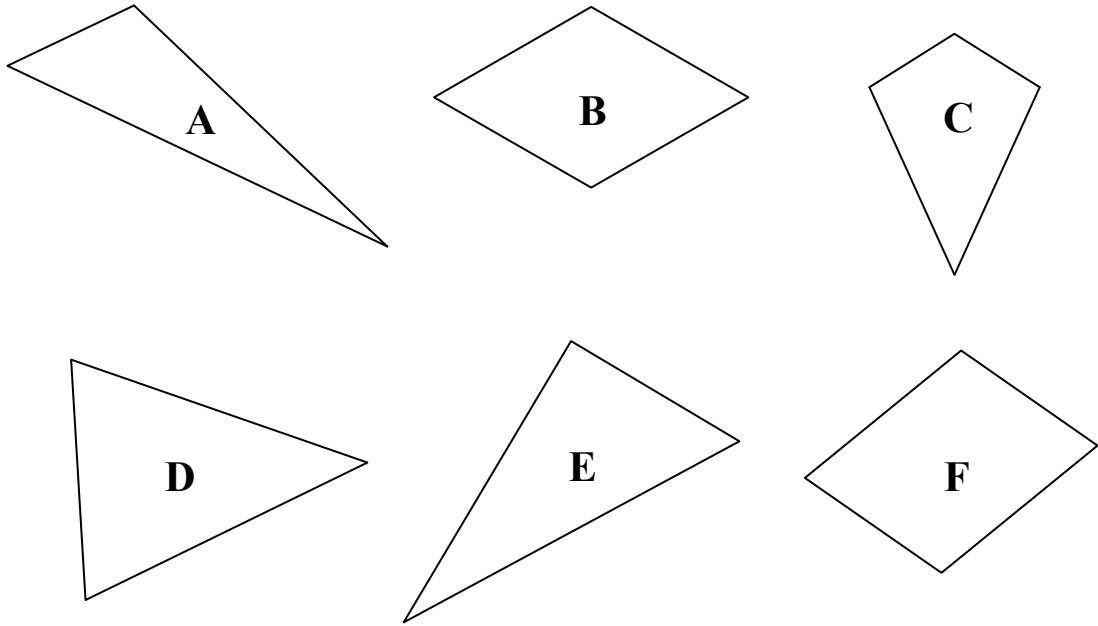
29.



The figure above is a hexagonal * pyramid / prism . (* Circle the answer)

It has _____ edges.

30.



(a) Which of the 2-D shapes above is a rhombus?

(Write the letter for the answer)

Answer: _____

(b) In the figure above, the triangle with two equal sides

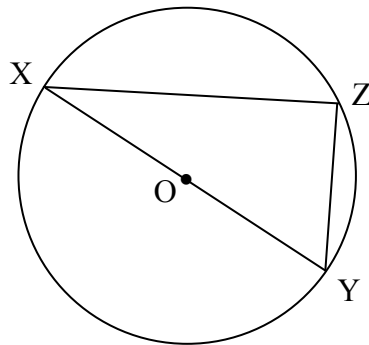
is _____ .

(Write the letter for the answer)

It is * an isosceles / a right-angled / an equilateral triangle.

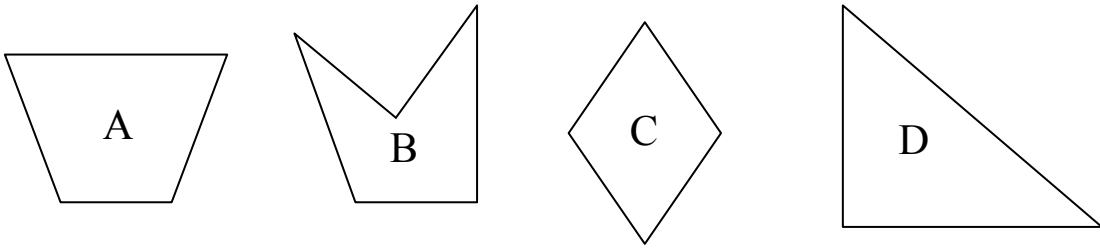
(* Circle the answer)

31. In the figure below, line XY is the diameter of the circle. OX and OY are lines of equal length.



- (a) Point O is
- A. a radius.
 - B. the centre.
 - C. a diameter.
 - D. the circumference.
- (b) The three lines XY , YZ and ZX in the circle form
- * an isosceles / a right-angled / an equilateral triangle.
- (* Circle the answer)

32. Study the following 2-D shapes. Write the letter(s) for the answer.



- (a) Which of the 2-D shapes above has / have parallel lines?

Answer: _____

- (b) Which of the 2-D shapes above has / have perpendicular lines?

Answer: _____

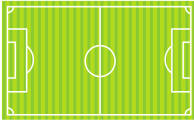
33. Which of the following stands for 'y is divided by 5 and then 2 is subtracted from the result'?

- A. $\frac{y}{5} - 2$
- B. $\frac{y - 2}{5}$
- C. $\frac{y}{5 - 2}$
- D. $\frac{5}{y} - 2$

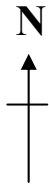

34.

Map of Sports City

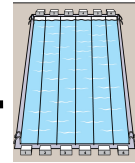
Football Field



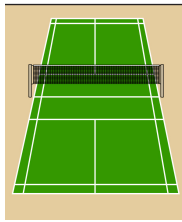
Flower Bed



Canteen



Swimming Pool



Badminton Court



Sports Ground

- (a) Vivian goes _____ from Badminton Court to
(direction)
Football Field. Then she turns _____ to
(direction)
reach Flower Bed.
- (b) Canteen is to the south-west of _____ .
- (c) After having a meal in Canteen, Bill goes
_____ to Football Field.
(direction)

Please do not write in the margin.

Please do not write in the margin.

Please do not write in the margin.

35. $21y = 7$

$y =$

36.

1-Day Tour to Geology Park
Fee

Adult: \$ 260 each

Child:  each

The fee of an adult is \$40 more than that of 2 children.

Find the fee of a child by the *method of solving an equation*. (Show your working)

Please do not write in the margin.

37. The points gained by four online game players are shown below.

Player	Adam	Tina	David	Susan
Points	600	400	300	100

According to the information in the table above, construct a pictogram and give it a title.

(Title)

Each ○ stands for 100 points



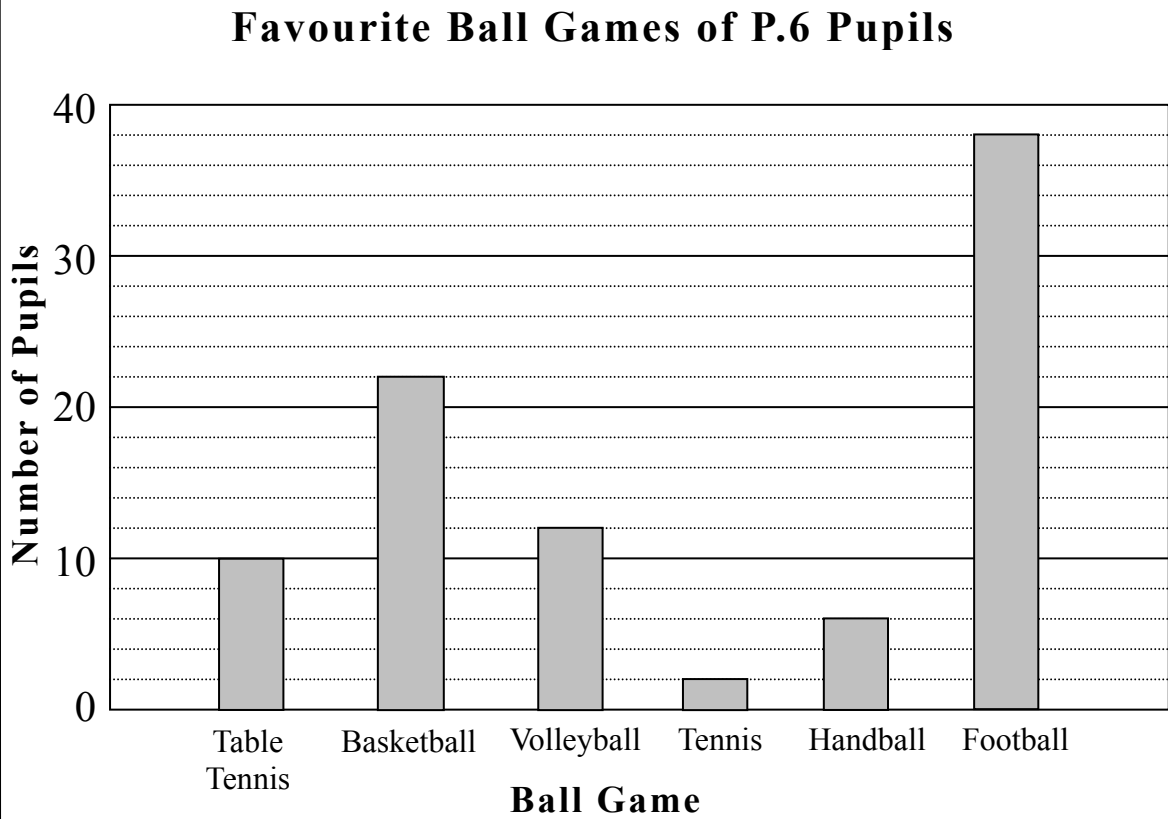
Adam Tina David Susan

Please do not write in the margin.

Please do not write in the margin.

Please do not write in the margin.

38. Mr Wong did a survey on the 'favourite ball games of P.6 pupils'. He drew the following bar chart according to the data.



Please do not write in the margin.

- (a) The most popular ball game of P.6 pupils is _____ .
- (b) The total number of pupils taking part in this survey is _____ .
- (c) The number of P.6 pupils who liked table tennis most is _____ * more / less than that of basketball. (* Circle the answer)

Please do not write in the margin.

39. Find the average of the five numbers below.

20 , 19.5 , 100 , $10\frac{1}{2}$, 100

Answer: The average is _____ .

— END OF PAPER —

Please do not write in the margin.

©Education Bureau, HKSAR 2013
Prepared by the Hong Kong Examinations and Assessment Authority

2013-TSA-MATH-6ME1-20