



9	M	E	1	(A)
---	---	---	---	---	---	---



↑
Please stick the barcode label in the box.

Education Bureau
Territory-wide System Assessment 2018
Secondary 3 Mathematics
ANSWER BOOKLET

INSTRUCTIONS

1. Write your School Code, Class and Class Number in the boxes provided on this page.
2. Stick barcode labels in the spaces provided on page 1 and page 3.
3. The time allowed is 65 minutes.
4. Write ALL your answers in the spaces provided in this ANSWER BOOKLET.
5. Do not write in the margins.
6. Unless otherwise specified, numerical answers should be either exact or correct to 3 significant figures.
7. The use of HKEAA approved calculators is permitted.
8. Rough work should be done on the rough work sheet provided.

School Code

S			
---	--	--	--

Class

3	
---	--

Class No.

--	--

↑
Write one capital letter in this box.

SECTION A: Multiple Choice Questions

MC Questions - Blacken the circle under the correct answer with an **HB pencil**. For example :

A B C D
● ○ ○ ○

1. A B C D
 ○ ○ ○ ○

2. A B C D
 ○ ○ ○ ○

3. A B C D
 ○ ○ ○ ○

4. A B C D
 ○ ○ ○ ○

5. A B C D
 ○ ○ ○ ○

6. A B C D
 ○ ○ ○ ○

7. A B C D
 ○ ○ ○ ○

8. A B C D
 ○ ○ ○ ○

9. A B C D
 ○ ○ ○ ○

10. A B C D
 ○ ○ ○ ○

Please do not write in the margin.

Please do not write in the margin.

Please stick the barcode label in the box. →



Please do not write in the margin.

11. A B C D

12. A B C D

13. A B C D

14. A B C D

15. A B C D

16. A B C D

17. A B C D

18. A B C D

19. A B C D

20. A B C D

Please do not write in the margin.

SECTION B: Write your answers in the spaces provided. Working need not be shown.

21. $A =$ _____

$B =$ _____

$C =$ _____

22. Thickness = _____ cm

23. The width of the desk is _____ cm.

24. $s =$ _____

25. The value of the 5th term of the sequence is _____ .

26. _____

27. _____

28. $x =$ _____

29. *Circle the correct answer

* exact solution / approximate solution

30. _____

31. The radius of the circle is _____ cm.

Please do not write in the margin.

Please do not write in the margin.


Please do not write in the margin.

32. The order of rotational symmetry is _____ .
33. (a) $x =$ _____
(b) $y =$ _____
34. $x =$ _____
35. _____
36. The coordinates of point D' are (_____ , _____).
37. *Circle the correct answers (i) * Discrete data / Continuous data
(ii) * Discrete data / Continuous data
38. (a) The value of x is _____ .
(b) The total expenditure of the birthday party is \$ _____ .
(c) The difference between the expenditures on food and drinks is \$ _____ .
39. Mean = _____
Median = _____


Please do not write in the margin.

SECTION C: Answer in the spaces provided.
All working and conclusions must be clearly shown.

40.



41.



42.

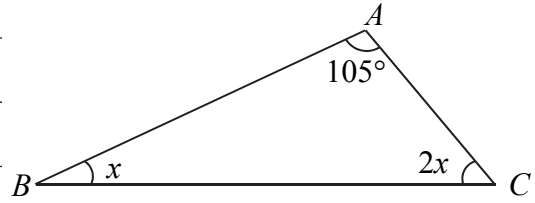


Please do not write in the margin.

Please do not write in the margin.

Please do not write in the margin.

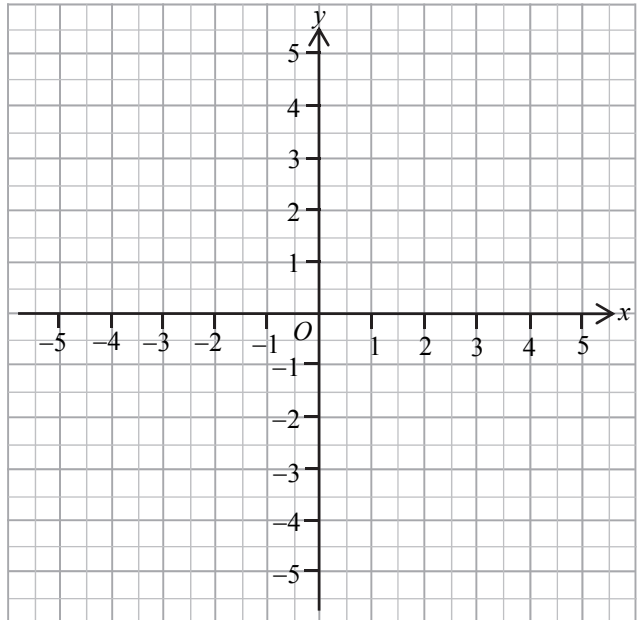
43.



44.

$$x - y = 0$$

x	-3	1	4
y		1	



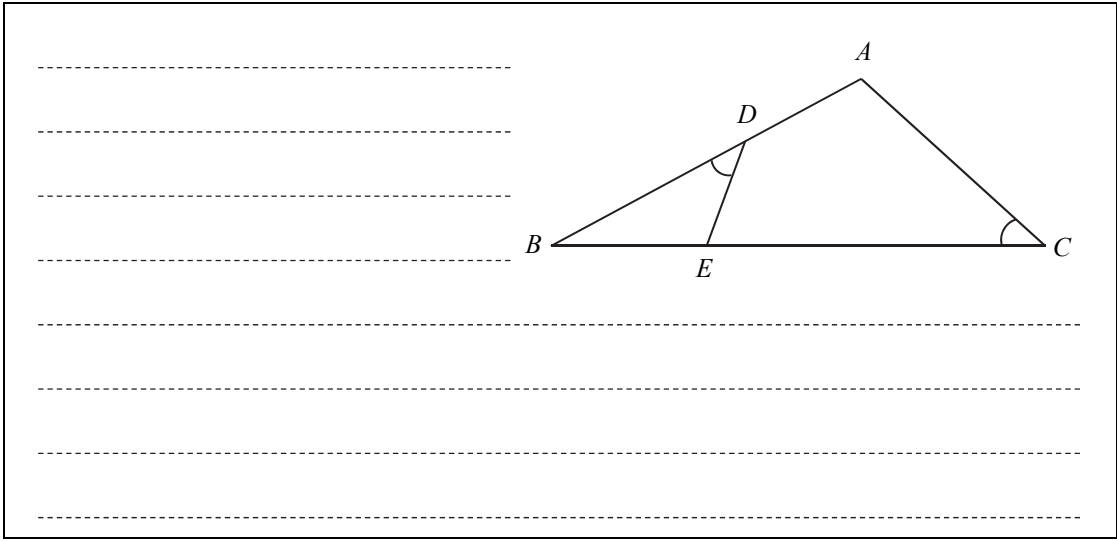
Please do not write in the margin.

Please do not write in the margin.

45.

.....
.....
.....
.....
.....
.....

46.



47.

Reason:

.....
.....
.....
.....
.....
.....
.....
.....
.....
.....

\therefore I * **agree** / **disagree** with the captain's claim. (*Circle the correct answer)

Please do not write in the margin.

END OF PAPER